



Question bank
Grade 1- Maths
Chapter 6- Addition up to 20

Questions

1) $11+5 = \text{-----}$

2) $16 + 4 = \text{-----}$

3) $18 + 0 = \text{-----}$

4) Add by drawing line

$$\begin{array}{r} 10 \\ + 2 \\ \hline \end{array}$$

$$\begin{array}{r} 10 \\ + 2 \\ \hline \end{array}$$

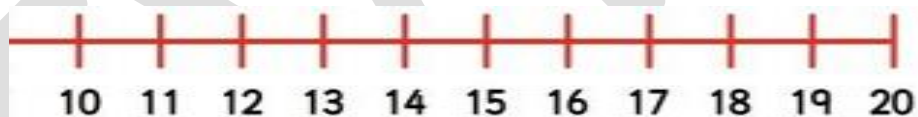
$$\begin{array}{r} 14 \\ + 3 \\ \hline \end{array}$$

$$\begin{array}{r} 14 \\ + 3 \\ \hline \end{array}$$

$$\begin{array}{r} 11 \\ + 1 \\ \hline \end{array}$$

$$\begin{array}{r} 11 \\ + 1 \\ \hline \end{array}$$

5) Add 15 and 2.



$$15+2 = \text{-----}$$

6) Add by counting forward.

$$14 + 5 = \text{-----}$$

7) Find the sum.

$$\begin{array}{r} 4 \\ + 1 \\ \hline \end{array}$$

$$\begin{array}{r} 4 \\ + 1 \\ \hline \end{array}$$

$$\begin{array}{r} 7 \\ + 2 \\ \hline \end{array}$$

$$\begin{array}{r} 7 \\ + 2 \\ \hline \end{array}$$

$$\begin{array}{r} 3 \\ + 0 \\ \hline \end{array}$$

$$\begin{array}{r} 3 \\ + 0 \\ \hline \end{array}$$





8) What is the sum of 14 and 3 ?

9) What is the sum of 15 and 0 ?

10) $16 + 1 = \text{-----} + 16$

11) 15 red balls + 4 green balls = ----- balls

12)

There are 8  in a garden. 6 more 
come along. Next 4 more  arrive.
How many  are there now? _____

13) Lucy ate 13 cookies on Monday and 4 cookies on Tuesday. How many cookies did she eat altogether?

14) Which of the following is equal to 15?

$13 + 2$

$14 + 2$

$12 + 1$

15) Fill in the addition table

+	5	2	4
3			
1			
6			